

11+ Kent Maths, English Practice Papers

✓ 4 Kent Practice Paper Packs

✓ 600+ Kent Style MCQs

✓ Detailed Answer & Hints

✓ Mirrors Real Exam Pattern



11+ Kent

Paper 4 - Test 1

English

Instructions:

1. Do not turn over the page until instructed to do so.
2. The test begins with a **5-minute practice section**.
3. The practice section consists of:
 - **Two reading comprehension** questions.
 - **Cloze questions, spelling/grammar/punctuation**, with an example question followed by practice questions.
4. The practice section is followed by the main questions.
5. Total time for the main test is **25 minutes**, with **25 questions**.
6. Work quickly and carefully through the questions.
7. If you finish early, go back and check your work.
8. This is a **multiple-choice test**. Each question carries **1 mark**.



English: Practice Section (5 mins)

Reading Comprehension

Read this passage carefully, then answer the questions that follow.

North and South

1. Margaret had been on the point of telling her cousin of some of the plans and visions which she entertained as to her future life in the country parsonage, where her father and mother lived; and where her bright holidays had always been passed, though for the last ten years her aunt Shaw's house had been considered as her home. But in default of a listener, she had to brood over the change in her life silently as heretofore. It was a happy brooding, although tinged with regret at being separated for an indefinite time from her gentle aunt and dear cousin. As she thought of the delight of filling the important post of only daughter in Helstone parsonage, pieces of the conversation out of the next room came upon her ears. Her aunt Shaw was talking to the five or six ladies who had been dining there, and whose
5. husbands were still in the dining-room.
10. husbands were still in the dining-room.



Read the above practice passage carefully and answer the following questions. Mark the correct answer on the provided answer sheet by choosing one of the options from A-E.

1

Where has Margaret been living for the past ten years?

- A** With her parents at the country parsonage
- B** With her aunt Shaw
- C** With her cousin
- D** At Helstone parsonage
- E** In the dining room

2

"It was a happy brooding, although tinged with regret..." (Line 5) What does "brooding" mean in this context?

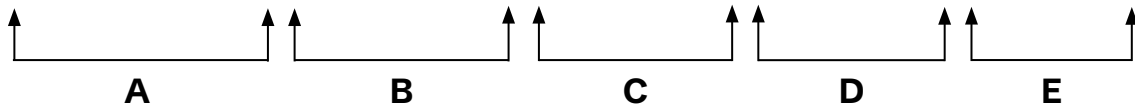
- A** Worrying anxiously
- B** Thinking deeply
- C** Feeling depressed
- D** Complaining silently
- E** Daydreaming carelessly



In the following sentences, on each line there is either one capital letter or punctuation mistake, or there is no mistake. Find the group of words with the mistake in it and mark its letter on the answer sheet.

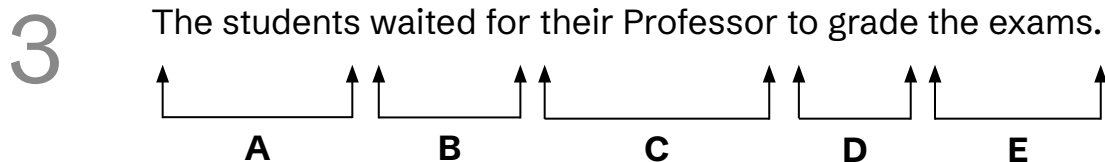
Example

The movie starts at eight oclock tonight at the local cinema downtown.



*The answer is **B** because there should be an apostrophe in "**o'clock**". This contraction of "of the clock" requires an apostrophe. None of the other lines contain punctuation or capitalisation errors, making **B** the only valid answer.*

Now try the practice question below. Work out the correct answer and mark it on the answer sheet.

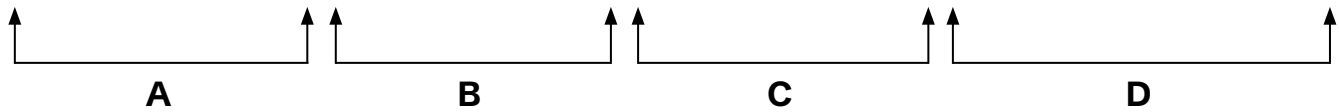




In the following sentences, on each line there is either one spelling mistake or none. Find the group of words with the mistake in it and mark its letter on the answer sheet. If there is no mistake, mark 'N'.

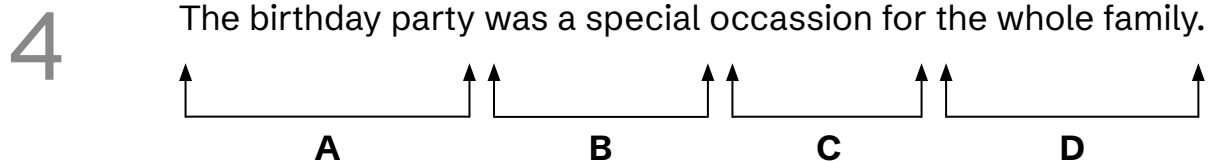
Example

The neighbour said he would organise the neighbourhood barbeque next Saturday.



*The answer is **D** because "barbeque" is incorrect in this context. The correct spelling should be "barbecue." This is a common misspelling where people often replace the "c" with a "q." All other words in the sentence are spelled correctly, so **D** is the valid answer.*

Now try the practice question below. Work out the correct answer and mark it on the answer sheet.





Identify the best word or group of words to complete the following sentences, so that it makes sense and is written in correct English. You should choose one of the following answers (A - E) and mark its letter on the answer sheet.

Example

The students listened attentively

when	while	during	since	until
A	B	C	D	E

the professor explained the complex theory.

*The answer is **B** because "while" correctly indicates that the students were listening at the same time as the professor was explaining. "When" could work but is less precise about the simultaneous nature of the actions. "During" would require a noun (e.g., "during the lecture") rather than a clause with a subject and verb. "Since" incorrectly suggests the listening started at a point in time and continued for a reason. "Until" incorrectly implies the listening stopped when the explanation began. Therefore **while**, option **B** is the only valid answer.*

Now try the practice questions below. Work out the correct answer and mark it on the answer sheet.

5 The children built a sandcastle

on	at	by	through	from
A	B	C	D	E

the beach while the waves crashed nearby.



6

They decorated it with seashells,

A **B** **C** **D**

adding small flags made from sticks and leaves.

E

This is the end of the English practice section.





English

You have **25 minutes to complete** this section. There are **25 questions**.
This section is **marked**.

Reading Comprehension

Read this passage carefully, then answer the questions that follow.

The Adventure of the Six Napoleons

In this extract, Mr Lestrade, a policeman, comes to visit Sherlock Holmes with a strange case to investigate.

1. On this particular evening Lestrade had spoken of the weather and the newspapers. Then he had fallen silent, puffing thoughtfully at his cigar. Holmes looked keenly at him.

'Anything remarkable on hand?' he asked.

5. 'Oh, no, Mr Holmes, nothing very particular.'

'Then tell me all about it.'

Lestrade laughed.

10. 'Well, Mr Holmes, there is no use denying that there is something on my mind. And yet it is such an absurd business that I hesitated to bother you about it. On the other hand, although it is trivial, it is undoubtedly queer, and I know that you have a taste for all that is out of the common. But in my opinion it comes more in Dr Watson's line than ours.'

'Disease?' said I.



15. 'Madness, anyhow. And a queer madness too! You wouldn't think there was anyone living at this time of day who had such a hatred of Napoleon the First that he would break any image of him that he could see.'

Holmes sank back in his chair.

'That's no business of mine,' said he.

20. 'Exactly. That's what I said. But then, when the man commits burglary in order to break images which are not his own, that brings it away from the doctor and on to the policeman.'

Holmes sat up again.

'Burglary! This is more interesting. Let me hear the details.'

Lestrade took out his official note-book and refreshed his memory from its pages.

25. 'The first case reported was four days ago,' said he. 'It was at the shop of Morse Hudson, who has a place for the sale of pictures and statues in the Kennington Road. The assistant had left the front shop for an instant, when he heard a crash, and, hurrying in found a plaster bust of Napoleon, which stood with several other works of art upon the counter, lying shivered into fragments. He rushed out into the road,
30. but, although several passers-by declared that they had noticed a man run out of the shop, he could neither see anyone nor could he find any means of identifying the rascal. It seemed to be one of those senseless acts of hooliganism which occur from time to time, and it was reported to the constable on the beat as such. The plaster cast was not worth more than a few shillings, and the whole affair appeared
35. to be too childish for any particular investigation.

'The second case, however, was more serious and also more singular. It occurred only last night.



40. 'In Kennington Road, and within a few hundred yards of Morse Hudson's shop, there lives a well-known medical practitioner, named Dr Barnicot, who has one of the largest practices upon the south side of the Thames. His residence and principal consulting-room is at Kennington Road, but he has a branch surgery and dispensary at Lower Brixton Road, two miles away. This Dr Barnicot is an enthusiastic admirer of Napoleon, and his house is full of books, pictures, and relics of the French Emperor. Some little time ago he purchased from Morse Hudson two duplicate plaster casts of
45. the famous head of Napoleon by the French sculptor Devine. One of these he placed in his hall in the house at Kennington Road, and the other on the mantelpiece of the surgery at Lower Brixton. Well, when Dr Barnicot came down this morning he was astonished to find that his house had been burgled during the night, but that nothing had been taken save the plaster head from the hall. It had been carried out, and had been dashed savagely against the garden wall, under which its splintered fragments were discovered.'

Holmes rubbed his hands.

'This is certainly very novel,' said he.



Read the above passage carefully and answer the following questions. Mark the correct answer on the provided answer sheet by choosing one of the options from A-E.

1

What is Holmes' initial reaction when Lestrade first mentions the case?

- A** Curiosity
- B** Disinterest
- C** Amusement
- D** Enthusiasm
- E** Skepticism

2

How does Holmes' attitude change when he hears about the burglary?

- A** He becomes angry
- B** He remains uninterested
- C** He becomes intrigued
- D** He grows concerned
- E** He appears confused



3 What do we learn about Dr. Barnicot from the passage?

- A** He is a renowned surgeon
- B** He is an admirer of Napoleon
- C** He specialises in French history
- D** He is Lestrade's personal physician
- E** He is wealthy but reclusive

4 What is the relationship between Holmes and Lestrade?

- A** Superior and subordinate
- B** Close friends
- C** Rivals
- D** Professional acquaintances
- E** New associates

5 According to Lestrade, what is the criminal's apparent motivation?

- A** Financial gain
- B** Hatred of Napoleon
- C** Random vandalism
- D** Political statement
- E** Personal vendetta



6

Where did these crimes take place?

- A Central London
- B South London
- C North London
- D West London
- E East London

7

"Holmes sat up again." (Line 22) What literary technique is demonstrated by this physical action?

- A Symbolism
- B Imagery
- C Hyperbole
- D Personification
- E Paradox

8

"It had been carried out and had been dashed savagely against the garden wall." (Lines 49-50) What does "it" refer to?

- A The garden wall
- B The house
- C The plaster head
- D The surgery
- E The burglar



9 Where was the Napoleon bust destroyed in the second case?

- A** Inside the shop
- B** Inside the house
- C** Against the garden wall
- D** At the surgery
- E** On the street

10 How many days passed between the first and second incidents?

- A** One day
- B** Two days
- C** Three days
- D** Four days
- E** Five days

11 "Some little time ago he purchased from Morse Hudson two duplicate plaster casts." (Lines 44-45) Which words are adjectives describing "casts"?

- A** Two, duplicate, plaster
- B** Some, two, plaster
- C** Duplicate, plaster, famous
- D** Two, famous, French
- E** Plaster, famous, French



12 "Lestrade took out his official note-book and refreshed his memory from its pages." (Line 24) What does "refreshed his memory" mean?

- A** Reminded himself
- B** Made new notes
- C** Reorganised information
- D** Checked for accuracy
- E** Updated his records

13 "It seemed to be one of those senseless acts of hooliganism." (Line 32) What does "hooliganism" mean in this context?

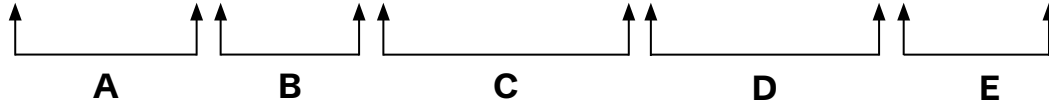
- A** Political activism
- B** Vandalism
- C** Theft
- D** Drunken behaviour
- E** Violence



In the following sentences, on each line there is either one capital letter or punctuation mistake, or there is no mistake. Find the group of words with the mistake in it and mark its letter on the answer sheet.

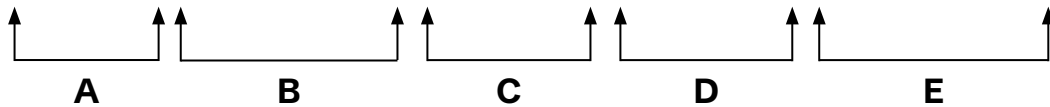
14

My favourite subject is english because I enjoy reading literature.



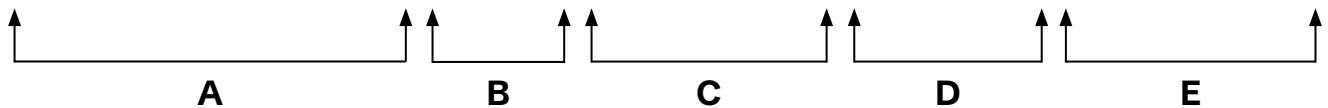
15

Mrs Smith our neighbour brought us some freshly baked cookies.



16

The doctors appointment has been rescheduled for next Monday in the afternoon.

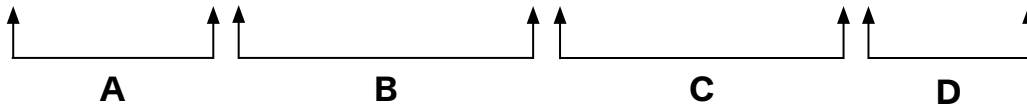




In the following sentences, on each line there is either one spelling mistake or none. Find the group of words with the mistake in it and mark its letter on the answer sheet. If there is no mistake, mark 'N'.

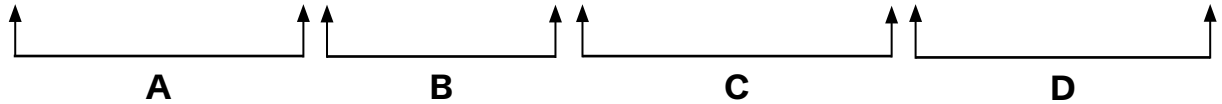
17

She couldn't beleive how quickly the train arrived at the station.



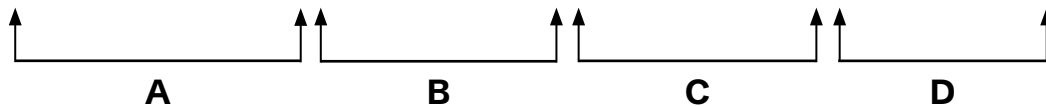
18

The football match was postponed due to heavy rainfall yesterday evening.



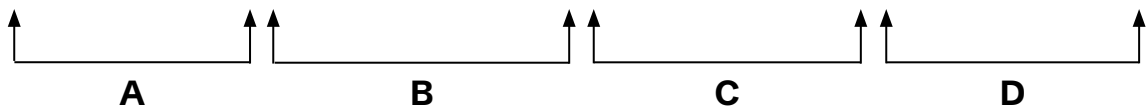
19

The accomodation was lovely with a beautiful view of the ocean.



20

She will need to organise the books and place them in seperate boxes.





Identify the best word or group of words to complete the following sentences, so that it makes sense and is written in correct English. You should choose one of the following answers (A - E) and mark its letter on the answer sheet.

21

The school bus arrived late

unless

A

although

B

because

C

while

D

until

E

the heavy rain caused traffic delays.

22

The students rushed into the classroom,

quickly

A

already

B

finally

C

eventually

D

suddenly

E

taking off their wet raincoats.

23

Ms. Johnson began the science lesson

since

A

after

B

during

C

before

D

while

E

the children settled in their seats.



24

She explained how water travels through plant stems,

whenever

as

A

B

unless

although

until

the students watched with curiosity.

C

D

E

25

The children

taking

took

have taken

had taken

take

A

B

C

D

E

notes in their science journals so they could remember the results.

11+ Kent

Paper 4 - Test 2

Maths

Instructions:

1. Do not turn over this page until instructed to do so.
2. The test begins with a **5-minute practice section**.
3. The practice section includes 4 questions.
 - The first question is solved as an example.
 - The remaining questions are for you to attempt.
4. The practice section is followed by the main questions.
5. Total time for the main questions is **25 minutes**.
6. Work quickly and carefully through the questions.
7. If you finish early, go back and check your work.
8. This is a **multiple-choice test**. Each question carries **1 mark**.



Maths: Practice Section (5 mins)

Example

Find the sum of three-fourths of 2400 and 360.

- A** 2160 **B** 1980 **C** 2140 **D** 1860 **E** 2040

Solution

Option A is correct

Three-fourths of 2400,

$$\frac{3}{4} \times 2400 = 1800$$

Adding 360 to the result

$$1800 + 360 = \mathbf{2160}$$



Now try the practice questions below. Work out the correct answer and mark it on the answersheet.

1 Evaluate the expression:

$$\frac{2 \times (3 \times 8 - 4)}{4 \times (5 - 3)}$$

- A** 8 **B** 10 **C** 5 **D** 14 **E** 16

2 A toy factory produces twice as many toys every hour.

If it starts with 10 toys, how many toys will there be after 5 hours?

- A** 80 **B** 160 **C** 320 **D** 640 **E** 1280

3 A cyclist travels 20 km to the park at an average speed of 20 km/hr and returns the same distance at an average speed of 30 km/hr.

What is the average speed of the cyclist for the entire journey?

- A** 22.5 km/hr **B** 24 km/hr **C** 25 km/hr
D 26 km/hr **E** 27 km/hr

This is the end of the Maths practice section.



Maths

You have **25 minutes to complete** this section. There are **25 questions**. This section is **marked**.

1 The angles in a triangle are in the ratio 2:4:6.

What is the largest angle in the triangle?

- A** 30° **B** 60° **C** 90° **D** 120° **E** 150°

2 A fisherman catches 15 fish every hour. He keeps 40% of the fish he catches and sells the rest.

How many hours will the fisherman need to spend fishing if he wants to sell 90 fish?

- A** 7 hours **B** 8 hours **C** 9 hours **D** 10 hours **E** 12 hours

3 Emma has £400. She buys a handbag that costs 320 Euros. (The exchange rate is: £1 = €1.25)

How many pounds does Emma have left?

- A** £120 **B** £144 **C** £160 **D** £180 **E** £200



4 John can read 200 words per minute.
How many minutes will he take to read 10 pages, if each page contains 600 words?

- A** 30 minutes **B** 28 minutes **C** 32 minutes
D 34 minutes **E** 35 minutes

5 Tina can complete a 6 km walk in 1 hour. Her dog, Max, runs twice as fast as Tina.

How long will it take Max to cover 6 km at this speed??

- A** 15 minutes **B** 20 minutes **C** 30 minutes
D 45 minutes **E** 60 minutes

6 A farmer has x apple trees, y orange trees, and z pear trees. Each apple tree produces 50 apples, each orange tree produces 30 oranges, and each pear tree produces 20 pears..

Which expression represents the total number of fruits produced by all the trees?

- A** $50x + 30y + 20z$ **B** $5x + 3y + 2z$ **C** $x + y + z$
D $0.5x + 0.3y + 0.2z$ **E** $100x + 50y + 25z$



7 What is the difference between the missing numbers in the sequence below?

This is the sequence: $_$, 8, 6, 4, 2, $_$, -2

- A** 9 **B** 10 **C** 11 **D** 12 **E** 13

8 Which of these is closest to 3.5?

- A** 3.4955 **B** $\frac{18}{5}$ **C** 3.475 **D** 3.525 **E** 3.48

9 If 1 gallon is equivalent to 240 tablespoons, and 1 tablespoon is equal to 4 teaspoons.

How many teaspoons are there in 3 gallons?

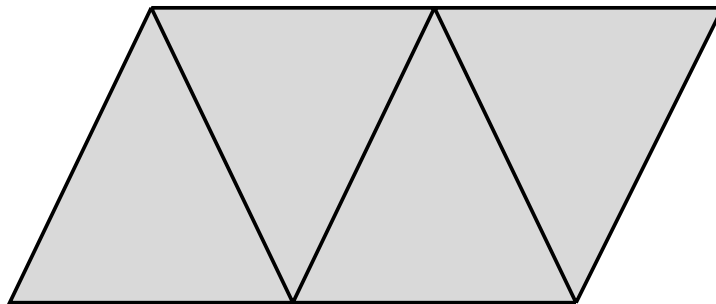
- A** 2880 **B** 2560 **C** 960 **D** 288 **E** 720



10 What is 25% of 15% of 320?

- A 12 B 8 C 10 D 14 E 16

11 A parallelogram is formed by joining 4 equilateral triangles. The side length of the triangle is 5 cm.



What is the perimeter of the parallelogram?

- A 30 cm B 40 cm C 50 cm D 45 cm E 55 cm

12 A map has a scale of 1:100000. A garden is represented by a square with a side length of 3 mm.

What would be the actual area of the garden?

- A 900m² B 1m² C 90000m² D 9m² E 100m²



13 Round 2.678 to the nearest tenth.

- A** 2.6 **B** 2.7 **C** 2.67 **D** 2.68 **E** 2.8

14 Jane earns £15 per hour with an extra £3 per hour for each hour worked after 10 pm.

How much would she earn for working from 4 pm to 2 am?

- A** £120 **B** £162 **C** £190 **D** £200 **E** £210

15 Find the mean of the three largest numbers in the set:

5, 7, 12, 3, 9, 15.

- A** 9 **B** 10 **C** 11 **D** 12 **E** 13



16 Which statement below is true?

A $\sqrt{64} > 9.5$

B $4^2 + 1^2 > 18$

C $2\frac{1}{2} + 4\frac{1}{4} = 4$

D $\frac{7}{4} - 1 = \frac{3}{4}$

E $\sqrt{49} > 6.5 > \sqrt{81}$

17 Find the radius of a circle that has a perimeter of 94.2 cm.
Use $\pi = 3.14$

A 10 cm

B 12.5 cm

C 15 cm

D 18 cm

E 20 cm

18 Gemma is twice as old as her sister Claire, whose age is $x + 2$ years. Tom, their younger brother, is $\frac{x}{3}$ years old.

If the total of their ages is 56 years, what is Claire's age??

A 12 years

B 14 years

C 17 years

D 18 years

E 23 years



19

A bakery produces 24 loaves of bread every hour. The bakery donates 25% of the bread it produces to charity and sells the rest.

How many hours will the bakery need to operate if it wants to sell 144 loaves of bread?

- A** 5 hours **B** 6 hours **C** 7 hours **D** 8 hours **E** 9 hours

20

Jared planned his day during school holidays using the following timetable. He takes breaks of 2 hours in total.

Activity	Time Spent
Homework	1 hours
Reading Storybooks	$2\frac{1}{4}$ hours
Cycling	90 minutes
Playing Video Games	3 hours

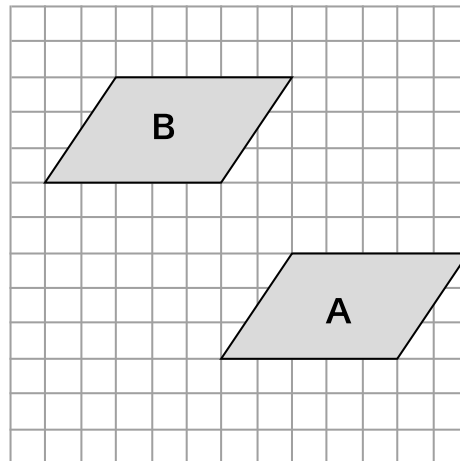
If he wants to go to bed at 8 pm, at what time should he wake up?

- A** 10:15 am **B** 09:30 am **C** 08:45 am
D 08:15 am **E** 07:45 am



21

Describe the translation that would map parallelogram A to B.



A 5 up, 5 right

B 5 up, 5 left

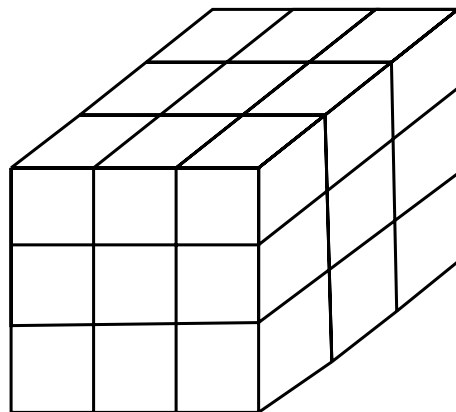
C 5 down, 4 right

D 4 up, 5 left

E 5 down, 4 left

22

A cube of side 3 cm is painted blue. It is then cut into set of cubes of side 1 cm.



How many 1 cm cubes will be there with 2 blue sides?

A 24

B 20

C 18

D 12

E 9



23

How many among the given letters have at least one line of symmetry?

A E I O U P J S

A 8

B 6

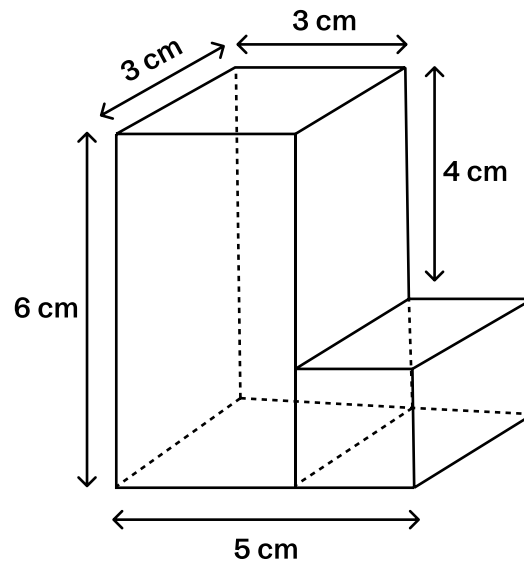
C 4

D 5

E 2

24

Determine the volume of the shape shown below.

A 66 cm^3 B 62 cm^3 C 58 cm^3 D 60 cm^3 E 52 cm^3

25

Three pencils and two erasers together cost £15. Four pencils and one eraser also cost £15.

Find the cost of a pencil.

A £2.40

B £2.80

C £3.00

D £3.20

E £3.60

This is the end of the Test 2 - Maths.



© piacademy.co.uk - All rights reserved

Visit piacademy.co.uk/11-plus-papers to check the 'answers'

Kent Paper 4 Session 2

Answer Marking Sheet

Pupil's Name

School Name

DATE OF BIRTH

Test Results	
Raw Score	<input style="width: 100%; height: 20px;" type="text"/>
Standardized Score	<input style="width: 100%; height: 20px;" type="text"/>
Marker's Initials	<input style="width: 100%; height: 20px;" type="text"/>
Checker's Initials	<input style="width: 100%; height: 20px;" type="text"/>

PUPILS REG, NUMBER									
<input type="text"/>	<input type="text"/>	<input type="text"/>	<input type="text"/>	<input type="text"/>	<input type="text"/>	<input type="text"/>	<input type="text"/>	<input type="text"/>	<input type="text"/>
[0]	[0]	[0]	[0]	[0]	[0]	[0]	[0]	[0]	[0]
[1]	[1]	[1]	[1]	[1]	[1]	[1]	[1]	[1]	[1]
[2]	[2]	[2]	[2]	[2]	[2]	[2]	[2]	[2]	[2]
[3]	[3]	[3]	[3]	[3]	[3]	[3]	[3]	[3]	[3]
[4]	[4]	[4]	[4]	[4]	[4]	[4]	[4]	[4]	[4]
[5]	[5]	[5]	[5]	[5]	[5]	[5]	[5]	[5]	[5]
[6]	[6]	[6]	[6]	[6]	[6]	[6]	[6]	[6]	[6]
[7]	[7]	[7]	[7]	[7]	[7]	[7]	[7]	[7]	[7]
[8]	[8]	[8]	[8]	[8]	[8]	[8]	[8]	[8]	[8]
[9]	[9]	[9]	[9]	[9]	[9]	[9]	[9]	[9]	[9]

Day	Month	Year
[0]	[0]	January <input type="checkbox"/> 1997 <input type="checkbox"/>
[1]	[1]	February <input type="checkbox"/> 1998 <input type="checkbox"/>
[2]	[2]	March <input type="checkbox"/> 1999 <input type="checkbox"/>
[3]	[3]	April <input type="checkbox"/> 2000 <input type="checkbox"/>
[4]	[4]	May <input type="checkbox"/> 2001 <input type="checkbox"/>
[5]	[5]	June <input type="checkbox"/> 2002 <input type="checkbox"/>
[6]	[6]	July <input type="checkbox"/> 2003 <input type="checkbox"/>
[7]	[7]	August <input type="checkbox"/> 2004 <input type="checkbox"/>
[8]	[8]	September <input type="checkbox"/> 2005 <input type="checkbox"/>
[9]	[9]	October <input type="checkbox"/> 2006 <input type="checkbox"/>
		December <input type="checkbox"/> 2007 <input type="checkbox"/>
		2008 <input type="checkbox"/>

Please mark boxes with a thin horizontal line like this .



Test 1 - English

Reading Comprehension

1

PRACTICE

A

B

C

D

E

2

PRACTICE

A

B

C

D

E

1

A

B

C

D

E

2

A

B

C

D

E

3

A

B

C

D

E

4

A

B

C

D

E

5

A

B

C

D

E

6

A

B

C

D

E

7

A

B

C

D

E

8

A

B

C

D

E

9

A

B

C

D

E

10

A

B

C

D

E

11

A

B

C

D

E

12

A

B

C

D

E

13

A

B

C

D

E

Capital Letters and Punctuation Exercises

EXAMPLE

A

B

C

D

E

3

PRACTICE

A

B

C

D

E



14

A	<input type="checkbox"/>
B	<input type="checkbox"/>
C	<input type="checkbox"/>
D	<input type="checkbox"/>
E	<input type="checkbox"/>

15

A	<input type="checkbox"/>
B	<input type="checkbox"/>
C	<input type="checkbox"/>
D	<input type="checkbox"/>
E	<input type="checkbox"/>

16

A	<input type="checkbox"/>
B	<input type="checkbox"/>
C	<input type="checkbox"/>
D	<input type="checkbox"/>
E	<input type="checkbox"/>

Spelling Exercises

EXAMPLE

A	<input type="checkbox"/>
B	<input type="checkbox"/>
C	<input type="checkbox"/>
D	<input checked="" type="checkbox"/>
N	<input type="checkbox"/>

4

PRACTICE

A	<input type="checkbox"/>
B	<input type="checkbox"/>
C	<input type="checkbox"/>
D	<input type="checkbox"/>
N	<input type="checkbox"/>

17

A	<input type="checkbox"/>
B	<input type="checkbox"/>
C	<input type="checkbox"/>
D	<input type="checkbox"/>
N	<input type="checkbox"/>

18

A	<input type="checkbox"/>
B	<input type="checkbox"/>
C	<input type="checkbox"/>
D	<input type="checkbox"/>
N	<input type="checkbox"/>

19

A	<input type="checkbox"/>
B	<input type="checkbox"/>
C	<input type="checkbox"/>
D	<input type="checkbox"/>
N	<input type="checkbox"/>

20

A	<input type="checkbox"/>
B	<input type="checkbox"/>
C	<input type="checkbox"/>
D	<input type="checkbox"/>
N	<input type="checkbox"/>

Grammar Exercises

EXAMPLE

A	<input type="checkbox"/>
B	<input checked="" type="checkbox"/>
C	<input type="checkbox"/>
D	<input type="checkbox"/>
E	<input type="checkbox"/>

5

PRACTICE

A	<input type="checkbox"/>
B	<input type="checkbox"/>
C	<input type="checkbox"/>
D	<input type="checkbox"/>
E	<input type="checkbox"/>

6

PRACTICE

A	<input type="checkbox"/>
B	<input type="checkbox"/>
C	<input type="checkbox"/>
D	<input type="checkbox"/>
E	<input type="checkbox"/>

21

A	<input type="checkbox"/>
B	<input type="checkbox"/>
C	<input type="checkbox"/>
D	<input type="checkbox"/>
E	<input type="checkbox"/>

22

A	<input type="checkbox"/>
B	<input type="checkbox"/>
C	<input type="checkbox"/>
D	<input type="checkbox"/>
E	<input type="checkbox"/>

23

A	<input type="checkbox"/>
B	<input type="checkbox"/>
C	<input type="checkbox"/>
D	<input type="checkbox"/>
E	<input type="checkbox"/>

24

A	<input type="checkbox"/>
B	<input type="checkbox"/>
C	<input type="checkbox"/>
D	<input type="checkbox"/>
E	<input type="checkbox"/>

25

A	<input type="checkbox"/>
B	<input type="checkbox"/>
C	<input type="checkbox"/>
D	<input type="checkbox"/>
E	<input type="checkbox"/>



Test 2 - Maths

EXAMPLE

A

B

C

D

E

1 PRACTICE

A

B

C

D

E

2 PRACTICE

A

B

C

D

E

3 PRACTICE

A

B

C

D

E

1

A

B

C

D

E

2

A

B

C

D

E

3

A

B

C

D

E

4

A

B

C

D

E

5

A

B

C

D

E

6

A

B

C

D

E

7

A

B

C

D

E

8

A

B

C

D

E

9

A

B

C

D

E

10

A

B

C

D

E

11

A

B

C

D

E

12

A

B

C

D

E

13

A

B

C

D

E

14

A

B

C

D

E

15

A

B

C

D

E

16

A

B

C

D

E

17

A

B

C

D

E

18

A

B

C

D

E

19

A

B

C

D

E

20

A

B

C

D

E

21

A

B

C

D

E

22

A

B

C

D

E

23

A

B

C

D

E

24

A

B

C

D

E

25

A

B

C

D

E

For Parents use only

Marks Scored: ----- Time taken: -----

Comments -----



© piacademy.co.uk - All rights reserved

Visit piacademy.co.uk/11-plus-papers to check the 'answers'